


北师大版 一年级上册 第三单元 加与减（一）

一共有多少




●有几支  ? 说一说，数一数。



●有几只  ? 说一说，数一数。



● 有几只  ? 说一说，数一数。



● 认一认。

加法

$$3 + 2 = 5$$

⋮

加号


读作：3加2等于5。

● 摆一摆，算一算。




$$1 + 3 = 4$$

● 摆一摆，算一算。



$$2 + 2 = 4$$


● 摆一摆，算一算。



The illustration shows a group of five yellow ducks. Four ducks are arranged in a 2x2 grid on the left, and one duck is positioned to the right of this group. Below the ducks, the equation $4 + 1 = 5$ is displayed. The numbers 4, 1, and 5 are each enclosed in a red rounded square, while the plus and equals signs are not.

练一练

说一说，填一填



$$2 + 3 = 5$$

$$3 + 2 = 5$$

练一练

说一说，填一填



$$2 + 2 = 4$$

以上内容仅为本文档的试下载部分，为可阅读页数的一半内容。如要下载或阅读全文，请访问：<https://d.book118.com/368127100020006070>