

人教版一年级上册数学专项练习-计算题 50 道

一. 计算题(共 50 题, 共 378 分)

1. 计算题。

$2+3=\square$

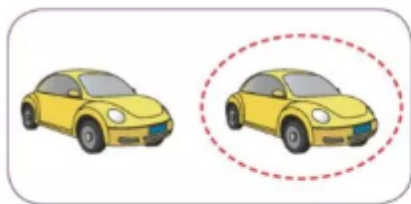
$2+1=\square$

$2+2=\square$

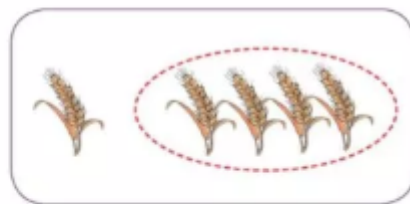
$3+2=\square$

$1+2=\square$

$1+1=\square$



$2-\square=\square$

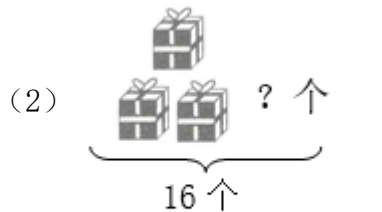


$5-\square=\square$


2. 看图写算式。





$\square \bigcirc \square = \square$



$\square \bigcirc \square = \square$

(3)  (4)

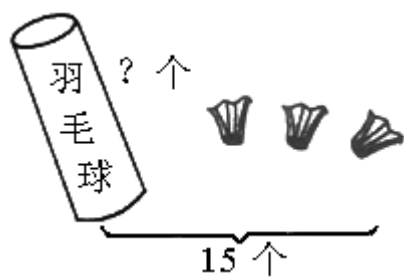
$\square \bigcirc \square \bigcirc \square = \square$

$\square \bigcirc \square = \square$ $\square \bigcirc \square = \square$

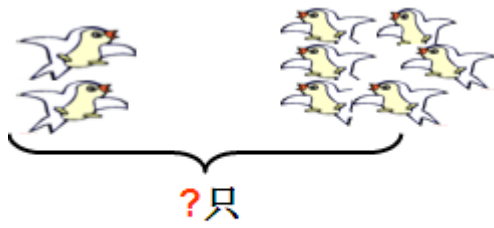
$\square \bigcirc \square = \square$ $\square \bigcirc \square = \square$

3. 看图列算式。



_____ = _____ (个)

4. 看图列式计算。



1.

$$\square \bigcirc \square = \square$$

2.



$$\square \bigcirc \square = \square$$


5. 看图列式计算。



女孩踢了□下，男孩踢了□下，两人一共踢了几下？

$$\square \bigcirc \square = \square \text{ (下)}$$

6. 看图列式计算。



1.

$$\square \bigcirc \square = \square$$



2.

$$\square \bigcirc \square = \square$$

7. 看谁算得又对又快。

$2+3=$

$2-2=$

$4-0=$

$1+1=$

$5+0=$

$0+1=$

$5-4=$

$1+4=$

$4-4=$

$2-0=$

$4-3=$

$0+3=$


$4-1=$

$1+3=$

$2+0=$

$3-1=$

8. 看图写算式。




$$\underline{\quad} - \underline{\quad} = \underline{\quad} \text{ (只)}$$

9. 看图写算式。



$$\square \bigcirc \square = \square$$



(2)

$$\square \bigcirc \square = \square$$

10. 算一算。


17-7= 8+8= 5+5= 7+6= 12-10=

19-2= 4+7= 16-4= 3+8= 6+7=

7+8= 10-5= 7-5= 14+3= 7+0=

13-3= 15+4= 2+7= 2+12= 10+6=

11. 我能列得对。



12. 我比电脑算得快.

$3+7=$ _____ $7+1=$ _____

$5+10=$ _____ $4+5=$ _____

$4+4=$ _____ $17-7=$ _____

$16-6=$ _____ $3+6=$ _____

$10-10=$ _____ $10+10=$ _____

13. 看图列式计算。




$\square \bigcirc \square = \square$ $\square \bigcirc \square = \square$

$\square \bigcirc \square = \square$ $\square \bigcirc \square = \square$

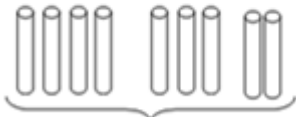
14. 看图列式计算：



$$\square \bigcirc \square \bigcirc \square = \square (\text{人})$$



$$\square \bigcirc \square \bigcirc \square = \square (\text{只})$$



?根

$$\square \bigcirc \square \bigcirc \square = \square (\text{根})$$

15. 看图列式计算。



? 朵


$$\square \bigcirc \square \bigcirc \square = \square$$

16. 看图列算式。



1.

$$\square + \square + \square = \square$$



2.

$$5 - \square - \square = \square$$

17. 看谁算得又对又快。

4+2=_____ 3+2=_____ 7+0=_____ 8+0=_____

4+3=_____ 3+3=_____ 7+1=_____ 8+1=_____

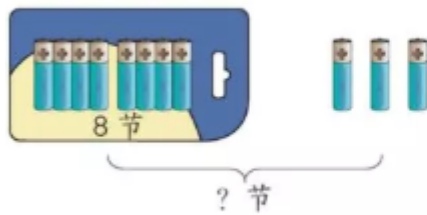
4+4=_____ 3+4=_____ 7+2=_____ 8+2=_____

18. 看图列式计算：

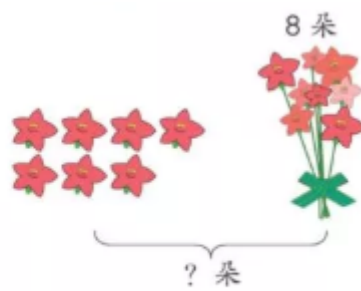


○ =

19. 列式计算。

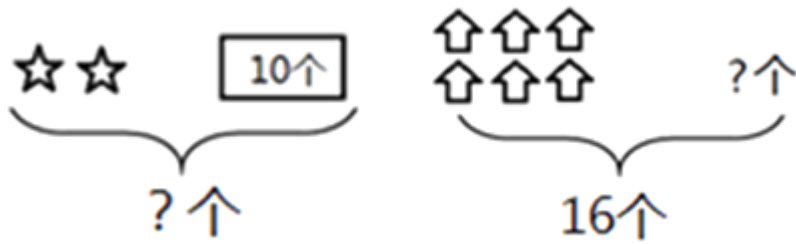


○ = (节)



○ = (朵)

20. 看图列算式。



$$\square \circ \square = \square \text{ (个)}$$

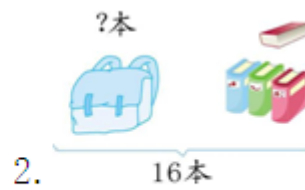
$$\square \circ \square = \square \text{ (个)}$$

21. 看图列式计算。



1.

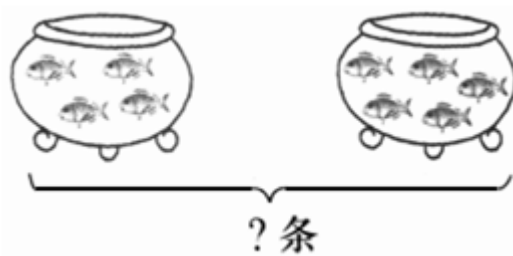
$$\square \circ \square = \square \text{ (支)}$$



2.

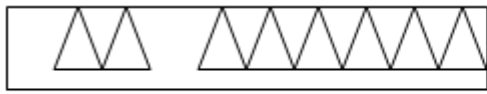
$$\square \circ \square = \square \text{ (本)}$$

22. 按图意列式计算。



$$\square \circ \square = \square \text{ (条)}$$

23. 列式计算。

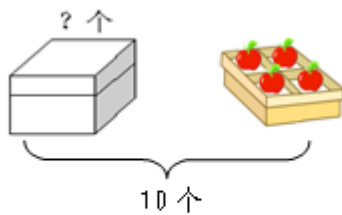


$$(\quad) + (\quad) = (\quad)$$



$$(\quad) - (\quad) = (\quad)$$

24. 列式计算。



$$(1) \square \bigcirc \square = \square (\quad) \quad (2)$$



$$\square \bigcirc \square = \square (\quad)$$

25. 算一算。

$$2+1= \quad 1+5= \quad 10-4= \quad 5-5= \quad 3+5=$$

$$7+2= \quad 6-5= \quad 7-5= \quad 5+5= \quad 1+6=$$

$$8-5= \quad 4+3= \quad 9-5= \quad 3+7= \quad 2+8=$$

$$0+9= \quad 1+1= \quad 9+0= \quad 10-5= \quad 0+8=$$

26. 直接写出下面各题的得数。

$$2-1= \quad 1+3= \quad 2+2= \quad 3-3= \quad 1+1= \quad 3+1=$$

$4+1=$

$3-2=$

$3-0=$

$0+5=$

$0-0=$

$5-0=$

以上内容仅为本文档的试下载部分，为可阅读页数的一半内容。如要下载或阅读全文，请访问：

<https://d.book118.com/667023155144006135>